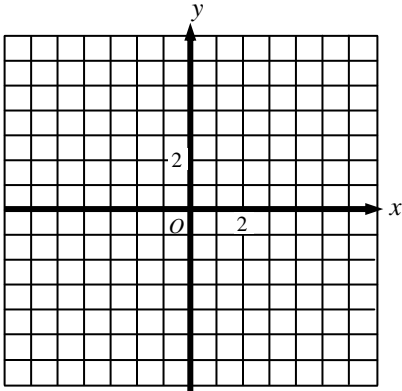


Slope - Day 6
Assignment

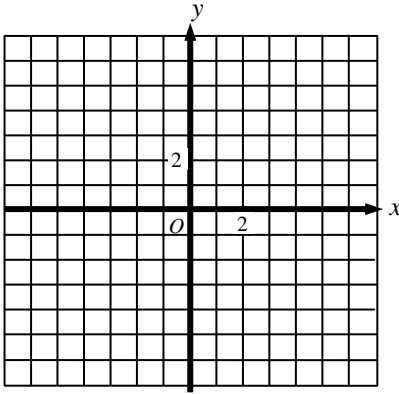
Name _____
Date _____ Period _____

Graph each equation.

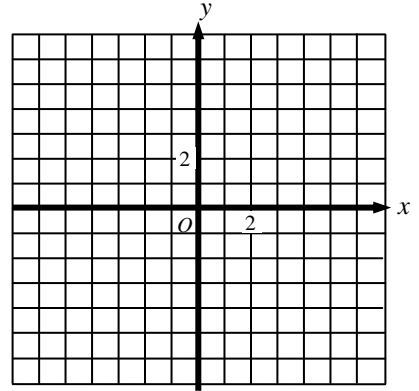
1. $2x + y = 4$



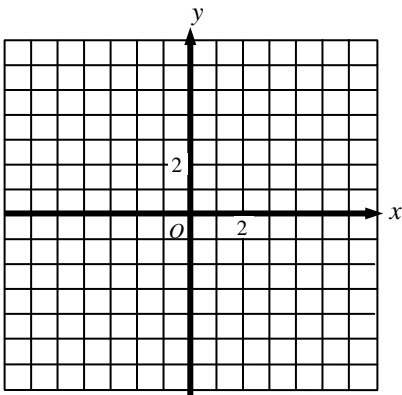
2. $y = -\frac{1}{2}x$



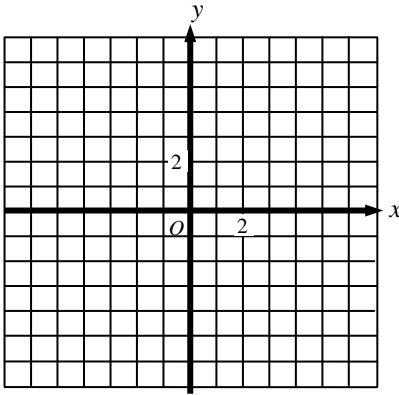
3. $-3x - y = -6$



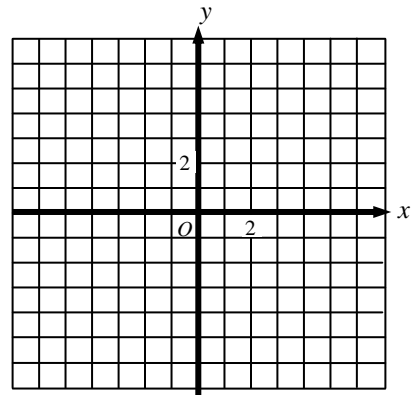
4. $y = 4 - \frac{4}{5}x$



5. $3x - 4y = -4$



6. $y = -3$



Write an equation for each of the four lines shown on the graph below.

7. _____

8. _____

9. _____

10. _____

