

Slope - Day 4  
Assignment

Name \_\_\_\_\_

Date \_\_\_\_\_ Period \_\_\_\_\_

1.

x	1	2	3	4	5
y	-7	-5	-3	-1	1

slope \_\_\_\_\_ y-intercept \_\_\_\_\_

equation \_\_\_\_\_

2.

x	2	4	6	8	10
y	-2	-4	-6	-8	-10

slope \_\_\_\_\_ y-intercept \_\_\_\_\_

equation \_\_\_\_\_

3.

x	3	6	9	12	15
y	0	1	2	3	4

slope \_\_\_\_\_ y-intercept \_\_\_\_\_

equation \_\_\_\_\_

4.

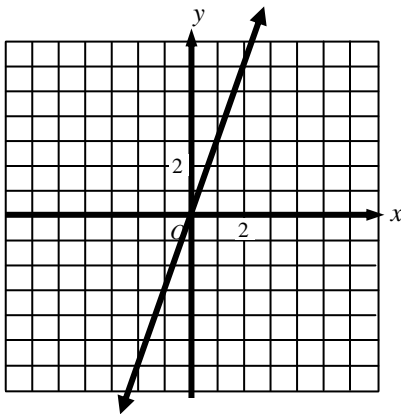
x	1	4	5	7	9
y	12	3	0	-6	-12

slope \_\_\_\_\_ y-intercept \_\_\_\_\_

equation \_\_\_\_\_

Find the slope and the y-intercept of the line.

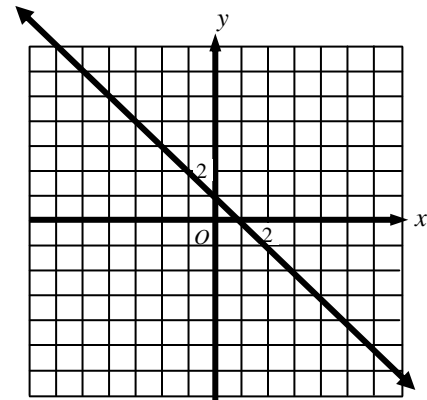
5.



slope \_\_\_\_\_ y-intercept \_\_\_\_\_

equation \_\_\_\_\_

6.



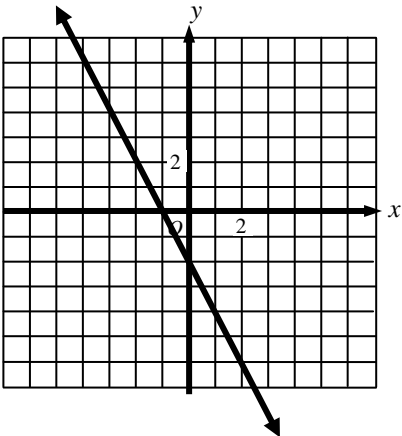
slope \_\_\_\_\_ y-intercept \_\_\_\_\_

equation \_\_\_\_\_

Slope - Day 4  
Assignment

Name \_\_\_\_\_  
Date \_\_\_\_\_ Period \_\_\_\_\_

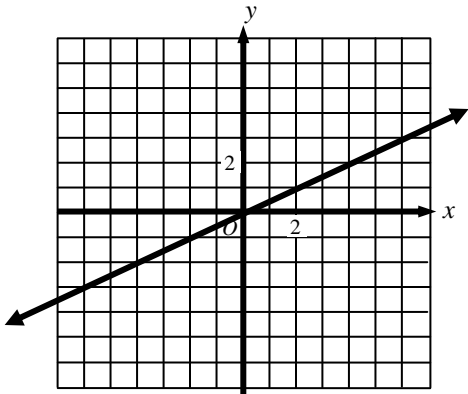
7.



slope \_\_\_\_\_ y-intercept \_\_\_\_\_

equation \_\_\_\_\_

8.



slope \_\_\_\_\_ y-intercept \_\_\_\_\_

equation \_\_\_\_\_